


Name: _____

Making 5


Use the 5 frames to add the pirates treasure!




$4 + \square = 5$




$1 + \square = 5$




$3 + \square = 5$



$2 + \square = 5$



$0 + \square = 5$



$5 + \square = 5$

